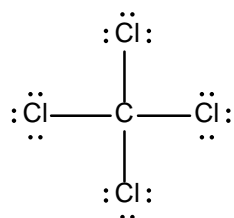


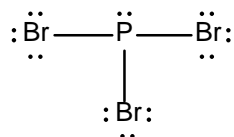
Answers to Exercise 8.1 Drawing Lewis Diagrams (No Formal Charges)

1.

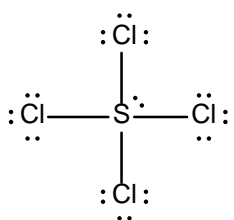
(a)



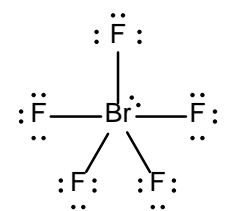
(b)



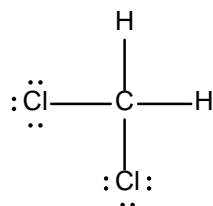
(c)



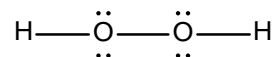
(d)



(e)



(f)

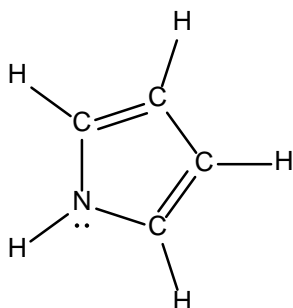


As long as the C is in the middle (attached to both Cl and both H), exactly where you draw each H and each Cl does not matter.

Both O must be in the middle (with one H attached to each O).

2.

(a)



(b)

