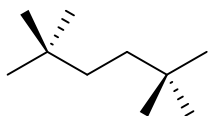


## Exercise 10.5

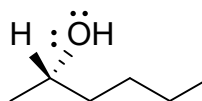
### Chirality and Enantiomers

1. For each of the following molecules, label all chirality centers with a \* and identify whether the molecule is chiral or achiral. For each of the chiral molecules, draw the molecule's enantiomer.

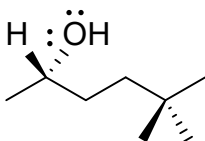
(a)



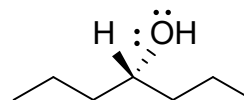
(b)



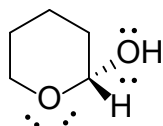
(c)



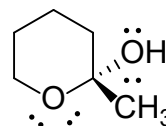
(d)



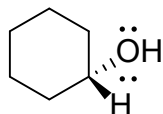
(e)



(f)



(g)



(h)

