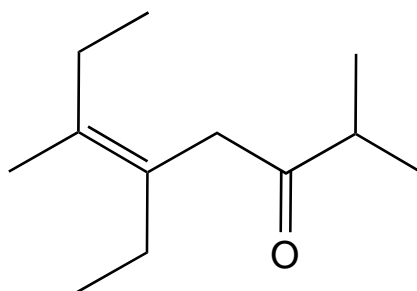
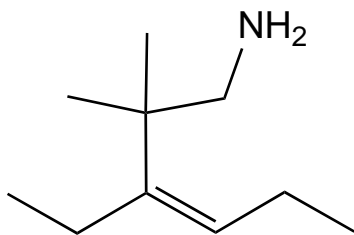
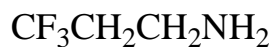
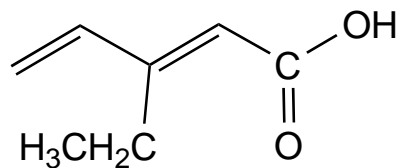
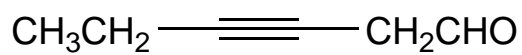
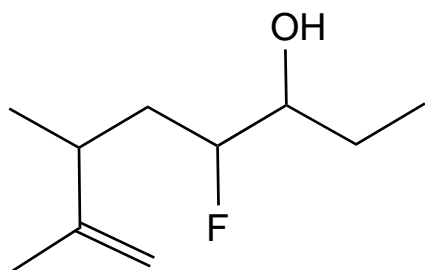


Exercize 12- Yet More Nomenclature - using all fields

Name the following:



Draw the following:

2-methyl-6-nitro-4-heptynoic acid

4,5-dimethyl-1,4-hexadien-3-ol