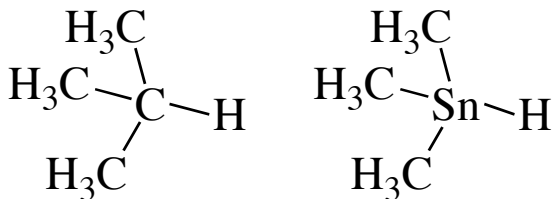


### Ex 38 - Acidity

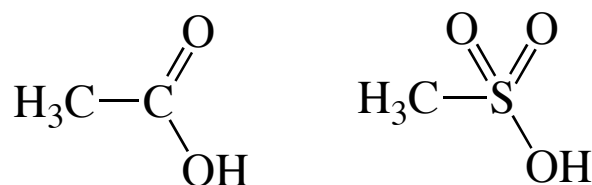
#### Question One

For each of the following groups of molecules, rank them by their acidity. Is the difference due to size, inductive effects, resonance effects or electronegativity?


i)




ii)



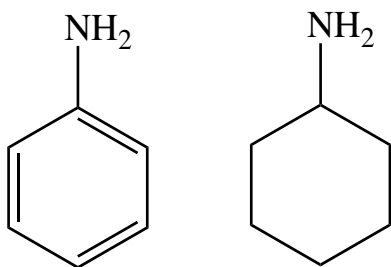
iii)



iv)



v)



vi)

