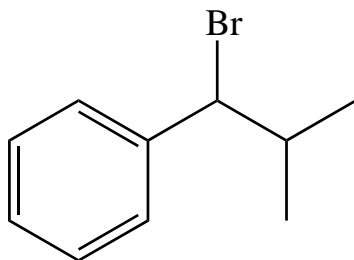
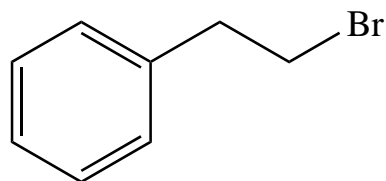
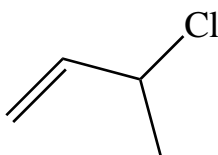
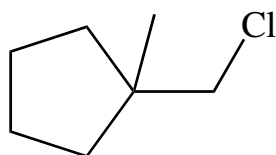
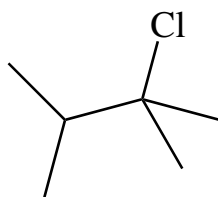
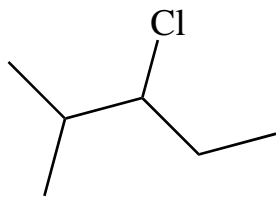


## Ex 46 - Carbocation Rearrangement

### Question One

Which of the following substrates will be prone to carbocation rearrangement?



### Question Two

Give a mechanism for each of the following reactions that occur with rearrangement.

