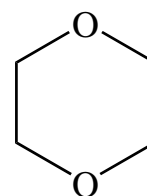
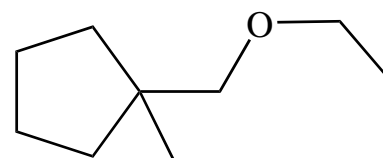
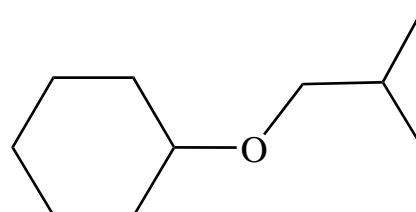
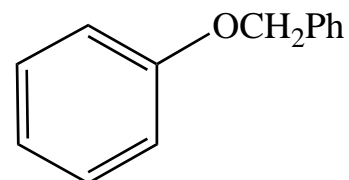


Exercise 63 - Ethers

Question One

How would you prepare the following ethers via the Williamson Ether Synthesis?



Question Two

Offer a mechanism for the following process.

