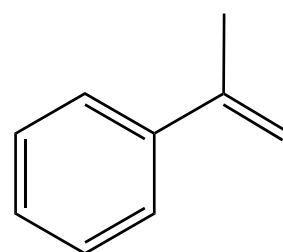
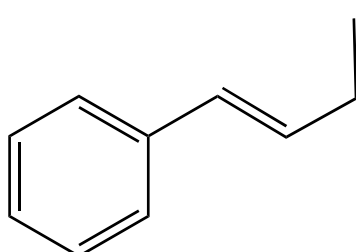
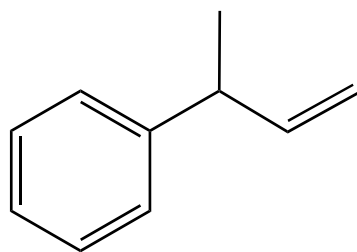
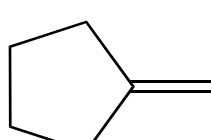
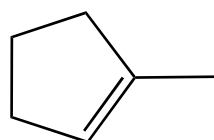
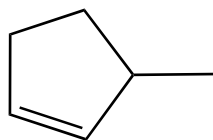
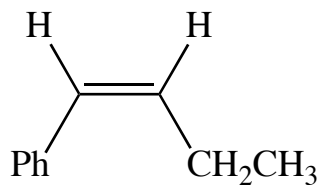
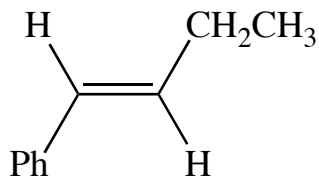


Exercise 69 - Alkene Stability

Question

In each of the following, rank the alkenes by decreasing order of stability.



Question

For each of the following substrates, give the structure of all possible *elimination* products. Assuming that the most stable alkene is the major product, indicate the major product in each case.

