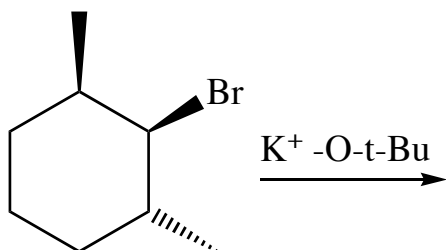
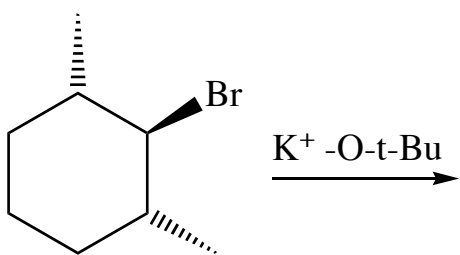
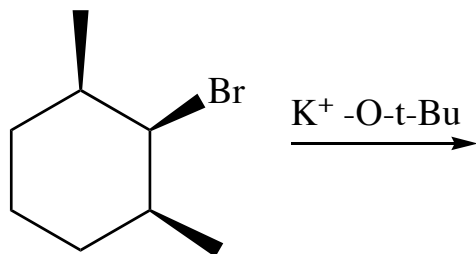


## Exercise 70 - E2 Stereochemistry

### Question

Given that the following three molecules have the absolute configurations given, show how each reactant gives a different outcome by E2.



### Question

What are the products of the following E2 reactions?

