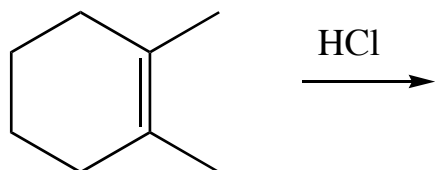
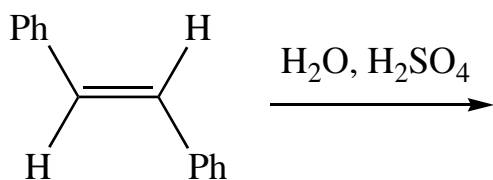
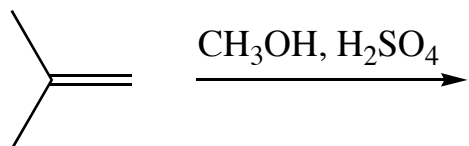
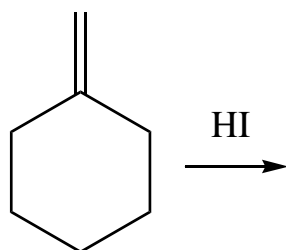
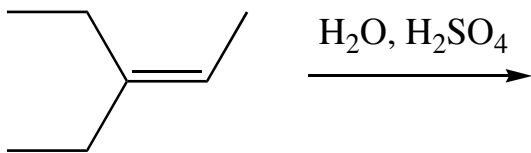


Exercise 73 - Electrophilic addition and Markovnikov's Rule

Question

Predict the product of the following reactions. Watch for stereochemical implications. Doing the mechanisms would be good practice, too.



Question

Application of Markovnikov's Rule to the following reaction suggests that a mixture is obtained, but in fact, only one product is observed. What product and why it only?

