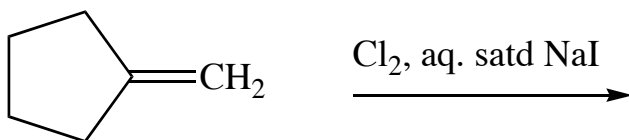
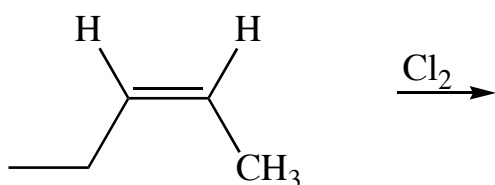
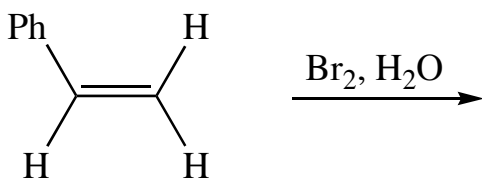
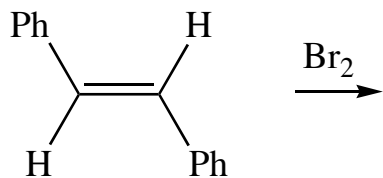


Exercise 74 - Addition of Br₂, Cl₂ etc.

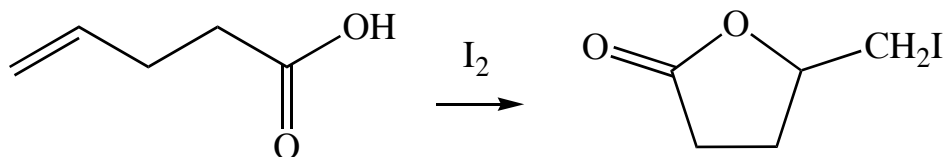
Question

Predict the products of the following reactions. Make sure that you address stereochemical aspects of the reaction as well.



Question

Provide a mechanism for the following:



Question

Predict the product of the following reaction and offer a mechanism.

