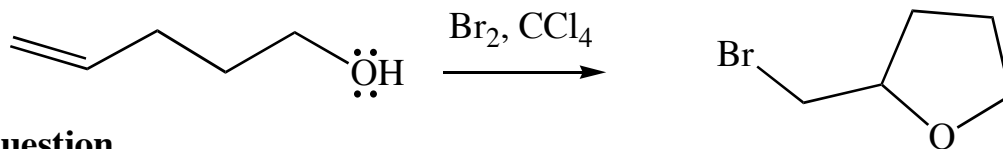


Exercise 79 - Mechanistic Questions

Question

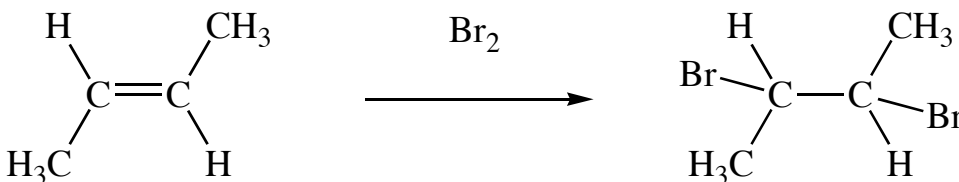
Give a mechanism for the following reaction:



Question

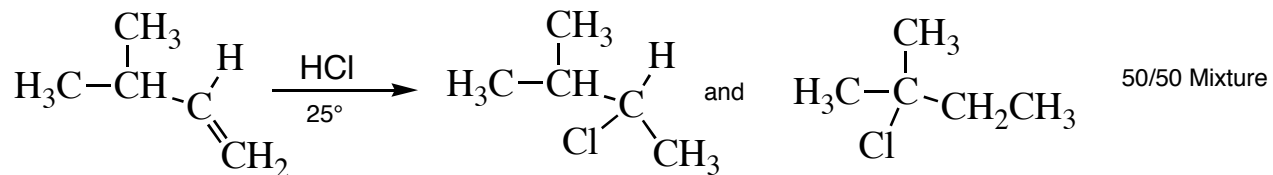
i) Give a mechanism for the following reaction.

ii) Sketch a reaction profile diagram for this reaction.



Question

Give mechanisms for the formation of both products in the following reaction.



Question

Give a mechanism for the following processes and explain the regioselectivity.

