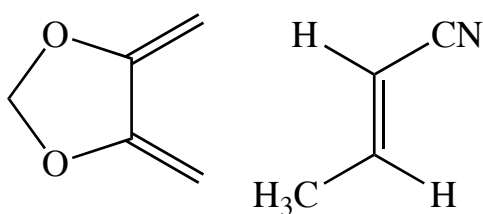
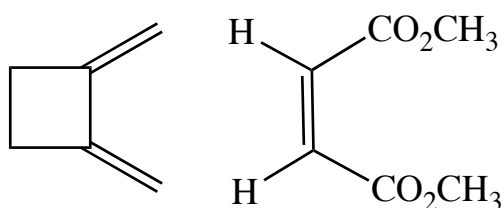
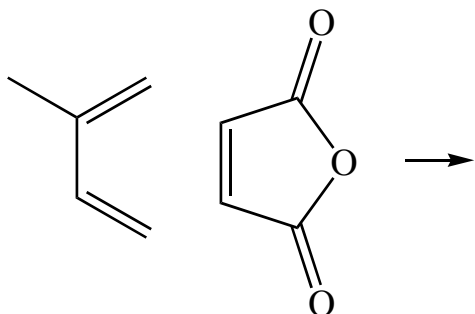


Exercise 81 - Diels-Alder Reactions

Question

Give the product of the following Diels-Alder reactions.



Question

What combination of diene and dienophile will give each of the following products?

